









Name: _____ Datum: _____ Klasse: _____

1)  
 $5 = 1 + \underline{\quad}$

 
 $5 = 3 + \underline{\quad}$

2)  
 $5 = 2 + \underline{\quad}$


 
 $5 = \underline{\quad} + 3$

3)  
 $5 = 4 + \underline{\quad}$



 
 $5 = 3 + \underline{\quad}$

4)  
 $2 + \underline{\quad} = 5$



 
 $4 + \underline{\quad} = 5$


5) 
 $0 + \underline{\quad} = 5$




 
 $1 + \underline{\quad} = 5$




6)  
 $\underline{\quad} + \underline{\quad} = 5$

 
 $\underline{\quad} + \underline{\quad} = 5$



7)  
 $\underline{\quad} + 3 = 5$



 $\underline{\quad} + 5 = 5$




8)   
 $2 + \underline{\quad} + \underline{\quad} = 5$



  
 $\underline{\quad} + 1 + \underline{\quad} = 5$

Diese Aufgaben schaffst du bestimmt auch noch

9)  
 $\underline{\quad} + \underline{\quad} + \underline{\quad} = 5$


 $\underline{\quad} + \underline{\quad} + \underline{\quad} = 5$

10)   
 $\underline{\quad} + \underline{\quad} + \underline{\quad} = 5$

  
 $\underline{\quad} + \underline{\quad} + \underline{\quad} = 5$