




Name: \_\_\_\_\_ Datum: \_\_\_\_\_ Klasse: \_\_\_\_\_

1)   
 $6 = 1 + \underline{\quad}$


  
 $6 = 3 + \underline{\quad}$


2)   
 $6 = 2 + \underline{\quad}$

  
 $6 = \underline{\quad} + 3$

3)   
 $6 = 4 + \underline{\quad}$


  
 $6 = 5 + \underline{\quad}$


4)   
 $2 + \underline{\quad} = 6$


  
 $4 + \underline{\quad} = 6$


5)   
 $0 + \underline{\quad} = 6$


  
 $1 + \underline{\quad} = 6$

6)   
 $\underline{\quad} + 5 = 6$

  
 $\underline{\quad} + 2 = 6$


7)   
 $\underline{\quad} + \underline{\quad} = 6$


  
 $\underline{\quad} + \underline{\quad} = 6$

8)   
 $2 + \underline{\quad} + \underline{\quad} = 6$

  
 $\underline{\quad} + 1 + \underline{\quad} = 6$

Diese Aufgaben schaffst du bestimmt auch noch

9)   
 $\underline{\quad} + \underline{\quad} + \underline{\quad} = 6$

  
 $\underline{\quad} + \underline{\quad} + \underline{\quad} = 6$

10)   
 $\underline{\quad} + \underline{\quad} + \underline{\quad} = 6$

  
 $\underline{\quad} + \underline{\quad} + \underline{\quad} = 6$