



Name: \_\_\_\_\_ Datum: \_\_\_\_\_ Klasse: \_\_\_\_\_

1)    
 $8 = 3 + \underline{\quad}$



   
 $8 = 4 + \underline{\quad}$



2)    
 $8 = 3 + \underline{\quad}$


   
 $8 = 6 + \underline{\quad}$

3)    
 $8 = \underline{\quad} + 5$



   
 $8 = \underline{\quad} + 1$

4)    
 $2 + \underline{\quad} = 8$



   
 $4 + \underline{\quad} = 8$



5)   
 $0 + \underline{\quad} = 8$




   
 $1 + \underline{\quad} = 8$

6)    
 $6 + \underline{\quad} = 8$

   
 $4 + \underline{\quad} = 8$




7)    
 $\underline{\quad} + 3 = 8$

   
 $\underline{\quad} + 5 = 8$




8)     
 $\underline{\quad} + \underline{\quad} + \underline{\quad} = 8$

    
 $\underline{\quad} + \underline{\quad} + \underline{\quad} = 8$

Diese Aufgaben schaffst du bestimmt auch noch

9)     
 $\underline{\quad} + \underline{\quad} + \underline{\quad} = 8$

    
 $\underline{\quad} + \underline{\quad} + \underline{\quad} = 8$

10)     
 $\underline{\quad} + \underline{\quad} + \underline{\quad} = 8$

    
 $\underline{\quad} + \underline{\quad} + \underline{\quad} = 8$