





Name: _____ Datum: _____ Klasse: _____

1)  
 $9 = 3 + \underline{\quad}$



 
 $9 = 7 + \underline{\quad}$



2)  
 $9 = 2 + \underline{\quad}$


 
 $9 = 6 + \underline{\quad}$

3)  
 $9 = 5 + \underline{\quad}$



 
 $9 = 7 + \underline{\quad}$



4)  
 $3 + \underline{\quad} = 9$



 
 $4 + \underline{\quad} = 9$



5) 
 $0 + \underline{\quad} = 9$

 
 $8 + \underline{\quad} = 9$

6)  
 $6 + \underline{\quad} = 9$

 
 $4 + \underline{\quad} = 9$




7)  
 $\underline{\quad} + 6 = 9$

 
 $\underline{\quad} + 5 = 9$




8)   
 $\underline{\quad} + \underline{\quad} + \underline{\quad} = 9$

  
 $\underline{\quad} + \underline{\quad} + \underline{\quad} = 9$

Diese Aufgaben schaffst du bestimmt auch noch

9)   
 $\underline{\quad} + \underline{\quad} + \underline{\quad} = 9$

  
 $\underline{\quad} + \underline{\quad} + \underline{\quad} = 9$

10)   
 $\underline{\quad} + \underline{\quad} + \underline{\quad} = 9$

  
 $\underline{\quad} + \underline{\quad} + \underline{\quad} = 9$